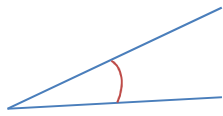
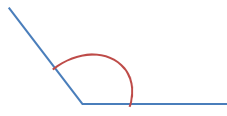


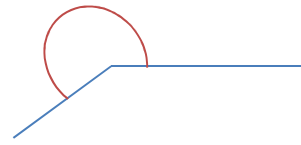
1) Zeichne jeweils einen spitzen, stumpfen und überstumpfen Winkel:



spitz



stumpf



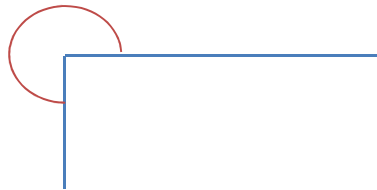
überstumpf

2) Zeichne folgende Winkel:

a) 90°



b) 270°



c) $\pi/2$



3) Ergänze die Tabelle

360°	2π
90°	$\pi/2$
270°	$3\pi/2$
45°	$\pi/4$
180°	π
720°	4π
135°	$3\pi/4$
0°	0